




Numbers

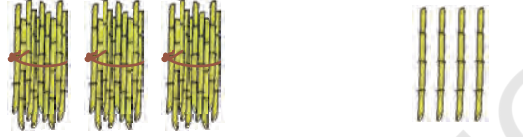


0119CH11

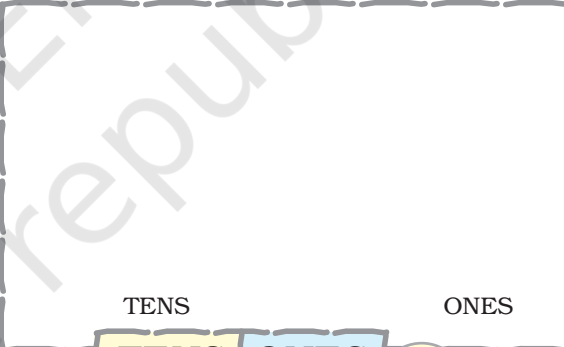


Write the number.

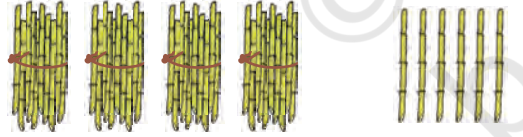
Draw the bundles of tens and ones of the number.


 TENS ONES

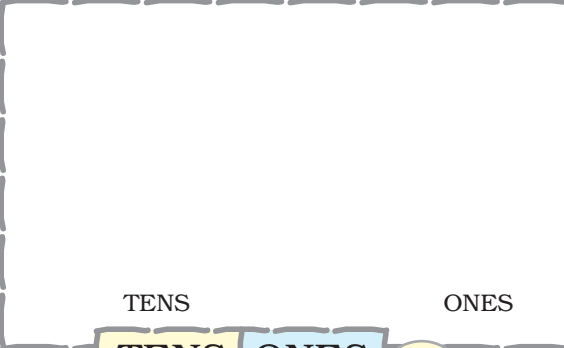
TENS	ONES	
3	4	


 TENS ONES


TENS	ONES	
		43


 TENS ONES

TENS	ONES	


 TENS ONES

TENS	ONES	
		22

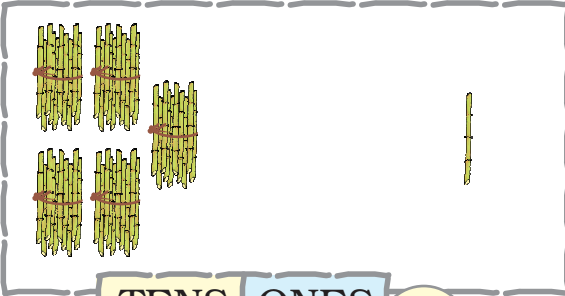

 TENS ONES

TENS	ONES	

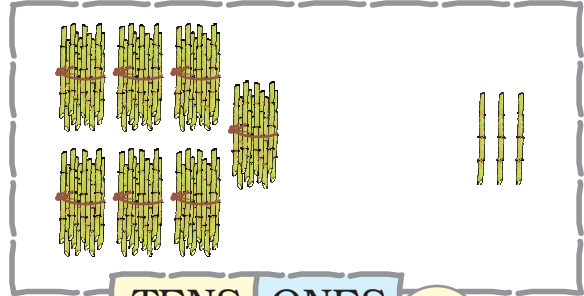




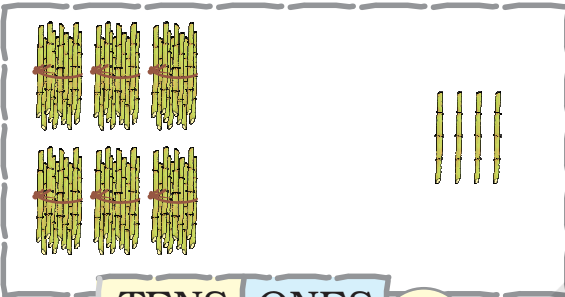
Write the number in the given space.



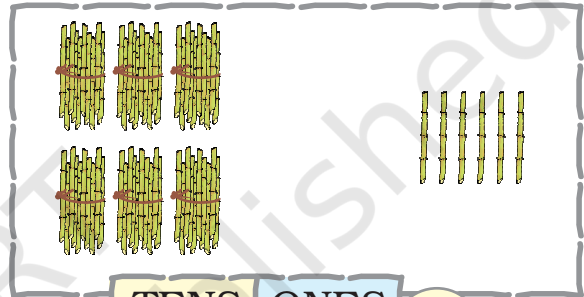
TENS	ONES	



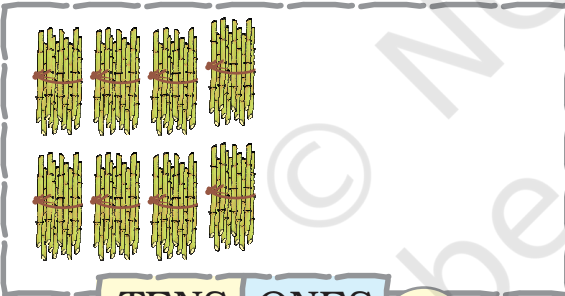
TENS	ONES	



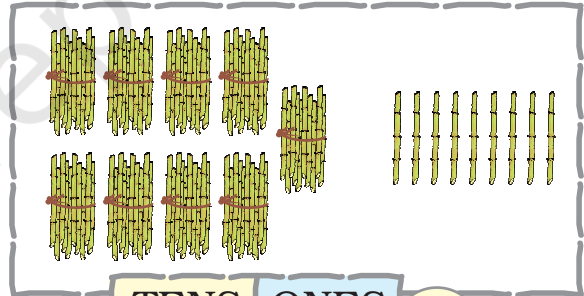
TENS	ONES	



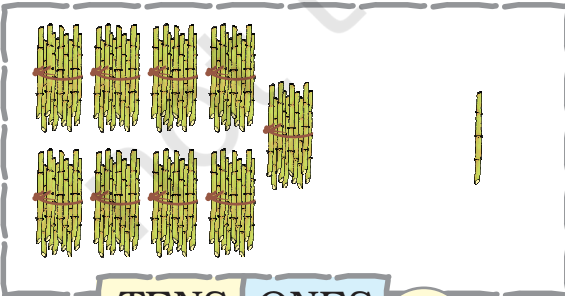
TENS	ONES	



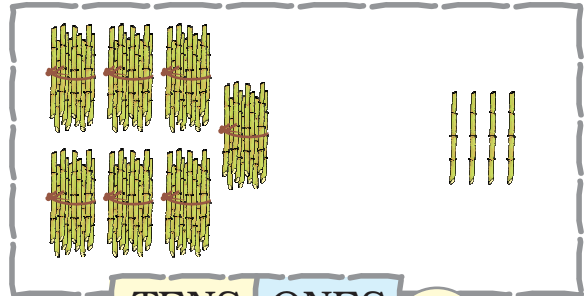
TENS	ONES	



TENS	ONES	



TENS	ONES	



TENS	ONES	



Numbers from 51 to 70

Fill in the blanks.

		51
5 TENS	1 ONE	

		61
6 TENS	1 ONE	

		52
5 TENS	2 ONES	

6 TENS	2 ONES	

		53
5 TENS	3 ONES	

		63
6 TENS	3 ONES	

		54
5 TENS	4 ONES	

6 TENS	4 ONES	

5 TENS	5 ONES	

		65
6 TENS	5 ONES	

5 TENS	6 ONES	

6 TENS	6 ONES	

5 TENS	7 ONES	

		67
6 TENS	7 ONES	

		58
5 TENS	8 ONES	

		68
6 TENS	8 ONES	

		59
5 TENS	9 ONES	

6 TENS	9 ONES	

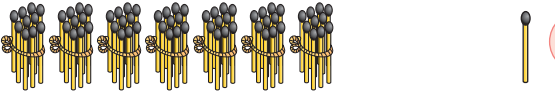
		60
5 TENS	1 TEN	

		70
6 TENS	1 TEN	



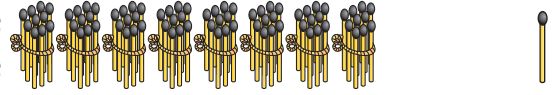
Numbers from 71 to 90

Fill in the blanks.


71


7 TENS

1 ONE


81

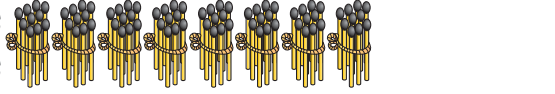
8 TENS

1 ONE



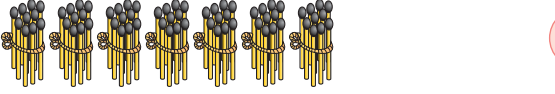
7 TENS

2 ONES


82

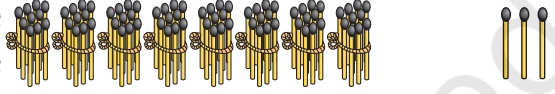
8 TENS

2 ONES


73

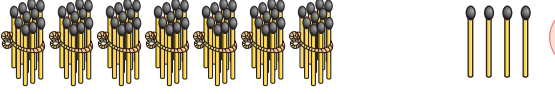
7 TENS

3 ONES



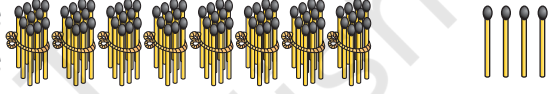
8 TENS

3 ONES


74

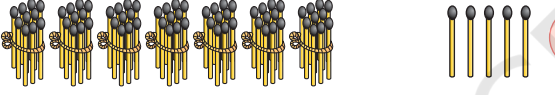
7 TENS

4 ONES



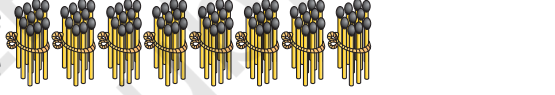
8 TENS

4 ONES



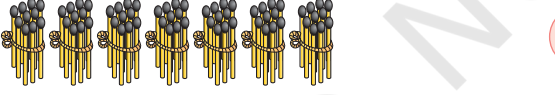
7 TENS

5 ONES


85

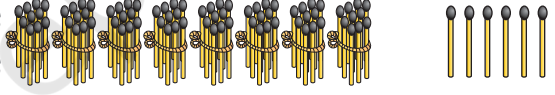
8 TENS

5 ONES


76

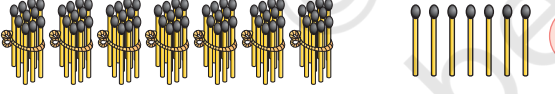
7 TENS

6 ONES


86

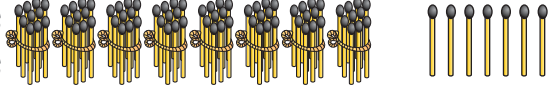
8 TENS

6 ONES



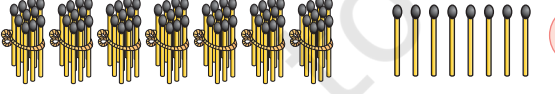
7 TENS

7 ONES



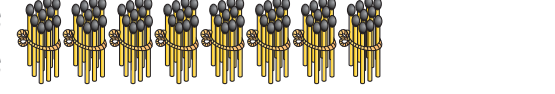
8 TENS

7 ONES




7 TENS

8 ONES


88

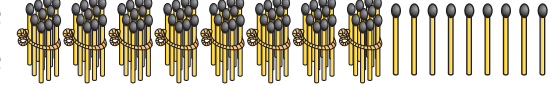
8 TENS

8 ONES


79

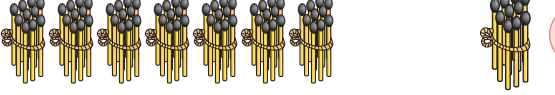
7 TENS

9 ONES


89

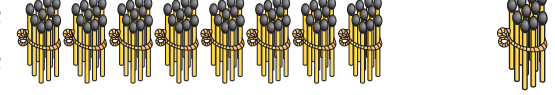
8 TENS

9 ONES


80

7 TENS

1 TEN


90

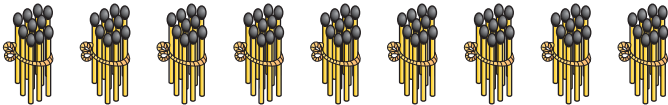

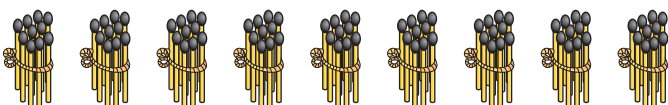


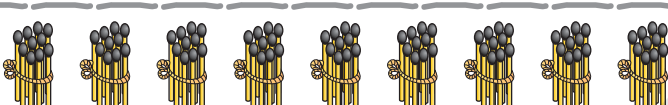
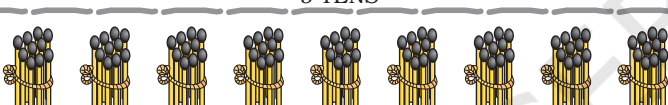

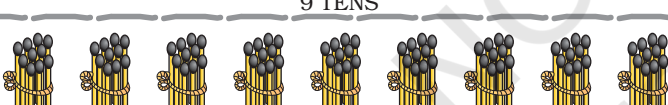
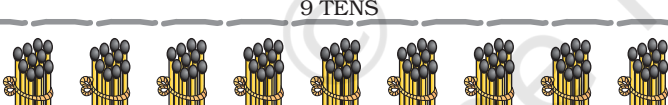







8 TENS

1 TEN



Numbers from 91 to 100

Fill in the blanks.

		91
9 TENS	1 ONE	
		92
9 TENS	2 ONES	
		93
9 TENS	3 ONES	
		94
9 TENS	4 ONES	
		95
9 TENS	5 ONES	
		96
9 TENS	6 ONES	
		
9 TENS	7 ONES	
		
9 TENS	8 ONES	
		
9 TENS	9 ONES	
		100
9 TENS	1 TEN	





Write the missing numbers.

51	52	53	54	55	56	57	58	59	60
	62			65				69	
		73							80
			84				88		
		93		95				99	



Let us play the game of snakes and ladders.

